

2-Digit Addition

Practice Worksheets

Addition

1. 41

+ 13

2. 56

+ 21

3. 16

+ 63

4. 32

+ 10

Add the Numbers

1. $11 + 12 =$

2. $13 + 14 =$

3. $15 + 12 =$

4. $20 + 13 =$

Get More Worksheets: www.thetinytutors.com

Get More Worksheets: www.thetinytutors.com





Add the Numbers

1. $11 + 12 =$

2. $13 + 14 =$

3. $15 + 12 =$

4. $20 + 13 =$





Complete the Addition

$$1. \quad 14 + \underline{\quad} = 25$$

$$2. \quad \underline{\quad} + 12 = 20$$

$$3. \quad 21 + \underline{\quad} = 30$$

$$4. \quad \underline{\quad} + 15 = 28$$






Add and Compare (>, <, =)

1. $12 + 13$ $10 + 14$

2. $21 + 12$ $15 + 10$

3. $14 + 11$ $13 + 12$

4. $23 + 10$ $20 + 15$





Break and Add (Tens + Ones)

1. $34 + 15 =$ _____

$(30 + 4) + (10 + 5) =$ _____

2. $46 + 12 =$ _____

$(40 + 6) + (10 + 2) =$ _____

3. $53 + 16 =$ _____

$(50 + 3) + (10 + 6) =$ _____

4. $25 + 14 =$ _____

$(20 + 5) + (10 + 4) =$ _____





Add and Compare

1. $64 + 15 =$ _____


2. $73 + 16 =$ _____

Which is greater? _____

3. $82 + 17 =$ _____

4. $71 + 18 =$ _____

Which is smaller? _____





Fill the Missing Digit

$$1. \quad 2 \square + 13 = 35$$

$$2. \quad 1 \square + 14 = 29$$

$$3. \quad 3 \square + 12 = 44$$

$$4. \quad 4 \square + 11 = 52$$





Addition

1. 41

+ 13

2. 56

+ 21



3. 16

+ 63

4. 32

+ 10





Add and Complete the Story

1. $12 + 13 = \underline{\quad}$

I had candies.

2. $21 + 14 = \underline{\quad}$


Now I have toys.

3. $15 + 12 = \underline{\quad}$

Total books.

4. $18 + 11 = \underline{\quad}$

There are balls.





Mystery Number

1. I am between 30 and 40.

Add ___ + 15 → 52

Answer = _____

2. I am between 20 and 30.

Add ___ + 18 → 45

Answer = _____

3. I am between 40 and 50.

Add ___ + 12 → 57

Answer = _____

4. I am between 25 and 35.

Add ___ + 20 → 50

Answer = _____





Number Pattern + Addition

1. 21, 23, 25, ____, ____

Add 10 to the last number →

____,____,____,____,____

2. 15, 20, 25, ____, ____

Add 12 to the last number →

____,____,____,____,____

3. 34, 36, 38, ____, ____



Add 10 to the last number →

____,____,____,____,____

4. 42, 44, 46, ____, ____

Add 13 to the last number →

____,____,____,____,____





Target Number Challenge

1. Use these numbers: 20, 15, 5

Make: 40

$$\text{Answer} = \underline{\quad} + \underline{\quad} = 40$$

2. Use these numbers: 30, 10, 5

Make: 45

$$\text{Answer} = \underline{\quad} + \underline{\quad} = 45$$

3. Use these numbers: 25, 20, 10

Make: 45

$$\text{Answer} = \underline{\quad} + \underline{\quad} = 45$$

4. Use these numbers: 40, 15, 5

Make: 55

$$\text{Answer} = \underline{\quad} + \underline{\quad} = 55$$





Fun Riddles

1. I am $12 + 15$. Who am I?

Answer = _____

2. I am greater than 20 but less than 30. I am $14 + \underline{\quad} = 26$

Answer = _____

3. Find me: $18 + 12 = \underline{\quad}$

Answer = _____

4. I am $25 + 10$. Who am I?

Answer = _____

