

# Subtraction

## Activities Worksheet

### Picture Subtraction

Look at the pictures and solve

#### Question 1

There are **3** frogs.  
**1** frog hops away.



Answer: -

$$3 - 1$$

Get More Worksheets

### Count and Subtract

Count the objects. Cross out the ones taken away and write the answer.

$5 - 2 = \boxed{3}$

$3 - 1 = \boxed{\phantom{00}}$

$4 - 2 = \boxed{\phantom{00}}$

$3 - 3 = \boxed{\phantom{00}}$

$6 - 3 = \boxed{\phantom{00}}$

Get More Worksheets



# Count and Subtract

Count the objects. Cross out the ones taken away and write the answer.



$$5 - 2 =$$



$$3 - 1 =$$



$$4 - 2 =$$




$$3 - 3 =$$



$$6 - 3 =$$





# Count and Subtract

Count the objects. Cross out the ones taken away and write the answer.

---

 $7 - 0$

13

---

 $3 - 1$

7

---

 $17 - 4$

2

---

 $9 - 3$

10


---

 $13 - 3$

6

---





# Circle the Correct Answer

Circle the number that shows the correct answer.

$10 - 2 =$     6    8    4


$7 - 2 =$     3    5    2

$9 - 5 =$     5    3    4

$3 - 1 =$     7    2    0


$5 - 5 =$     1    6    0






# Color and Subtract


Count the objects. Cross out the ones taken away and write the answer.




$3 - 2 =$



$10 - 5 =$




$8 - 6 =$



$7 - 4 =$





# Fill in the Missing Numbers

Write the missing number.


$$1. \quad 15 - \boxed{3} = 12$$

$$2. \quad \boxed{\phantom{00}} - 5 = 2$$

$$3. \quad 9 - \boxed{\phantom{00}} = 8$$

$$4. \quad \boxed{\phantom{00}} - 4 = 4$$





# Cut and Paste

Cut the pictures and paste the correct answer.

1.  $12 - 2 =$

2.  $9 - 2 =$

3.  $1 - 1 =$


Answer -

10

0

7





# Picture Subtraction

Look at the pictures and solve


## Question 1


There are **3** frogs.  
**1** frog hops away.



Answer: -

$$3 - 1 = \square$$






# Picture Subtraction

Look at the pictures and solve

## Question 2


There are **4** apples. **2** apples are taken away.



Answer: -

$$4 - 2 =$$



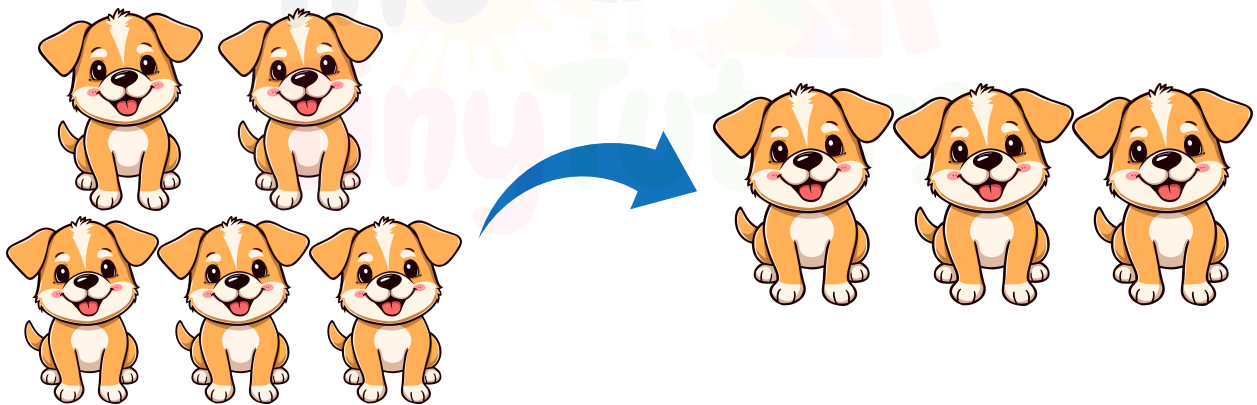


# Picture Subtraction

Look at the pictures and solve

## Question 3


There are **5** dogs. **3** dogs run away.



Answer: -

$$5 - 3 =$$





# Picture Subtraction

Look at the pictures and solve

## Question 4

There are **4** butterflies.  
**1** butterfly flies away.



Answer: -

$$4 - 1 =$$

