

Subtraction

Activities Worksheet

Picture Subtraction

Look at the pictures and solve

Question 1

There are **3** frogs.
1 frog hops away.



Answer: -

$$3 - 1$$

Get More Worksheets

Count and Subtract

Count the objects. Cross out the ones taken away and write the answer.



$$5 - 2 = \boxed{3}$$



$$3 - 1 = \boxed{}$$



$$4 - 2 = \boxed{}$$



$$3 - 3 = \boxed{}$$



$$6 - 3 = \boxed{}$$

Get More Worksheets



1

4



Count and Subtract

Count the objects. Cross out the ones taken away and write the answer.



$$5 - 2 =$$



$$3 - 1 =$$



$$4 - 2 =$$




$$3 - 3 =$$



$$6 - 3 =$$



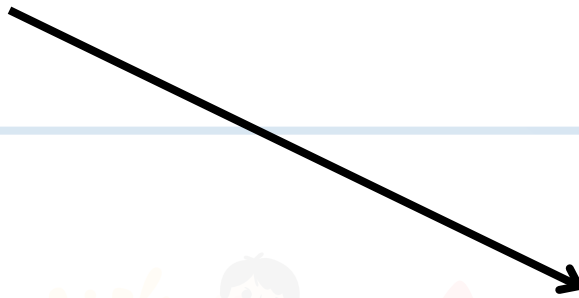


Subtract and Match

Subtract the numbers and match with the answers.

$7 - 0$

13



$3 - 1$

7

$17 - 4$

2


$9 - 3$

10

$13 - 3$

6





Circle the Correct Answer

Circle the number that shows the correct answer.

$10 - 2 =$ 6 8 4


$7 - 2 =$ 3 5 2

$9 - 5 =$ 5 3 4

$3 - 1 =$ 7 2 0


$5 - 5 =$ 1 6 0






Color and Subtract


Count and color the objects. Cross out the ones taken away and write the answer.




$3 - 2 =$



$10 - 5 =$




$8 - 6 =$



$7 - 4 =$





Fill in the Missing Numbers

Write the missing number.


$$1. \quad 15 - \boxed{3} = 12$$

$$2. \quad \boxed{} - 5 = 2$$

$$3. \quad 9 - \boxed{} = 8$$

$$4. \quad \boxed{} - 4 = 4$$





Cut and Paste

Cut the pictures and paste the correct answer.

1. $12 - 2 =$

2. $9 - 2 =$

3. $1 - 1 =$


Answer -

10

0

7





Picture Subtraction

Look at the pictures and solve


Question 1


There are **3** frogs.
1 frog hops away.



Answer: -

$$3 - 1 = \square$$






Picture Subtraction

Look at the pictures and solve


Question 2


There are **4** apples. **2** apples are taken away.



Answer: -

$$4 - 2 =$$



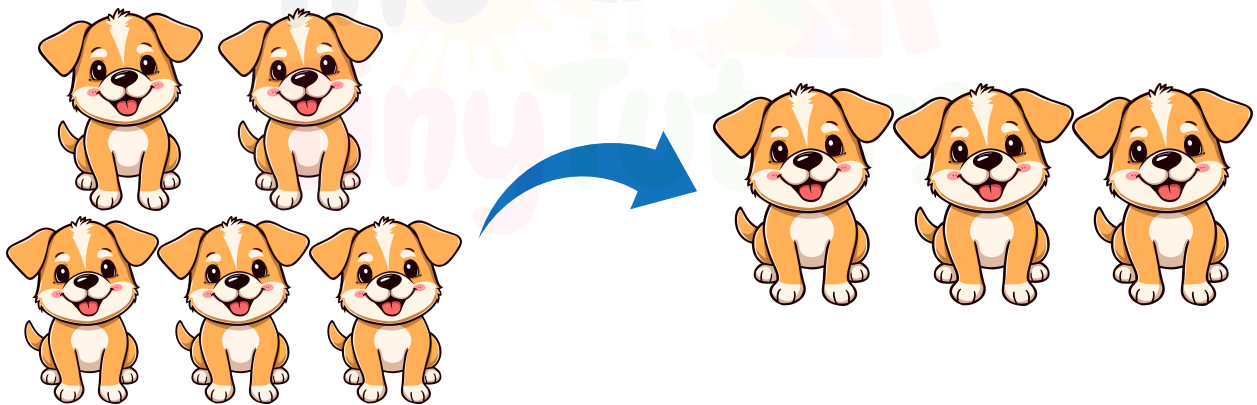


Picture Subtraction

Look at the pictures and solve

Question 3


There are **5** dogs. **3** dogs run away.



Answer: -

$$5 - 3 =$$





Picture Subtraction

Look at the pictures and solve

Question 4

There are **4** butterflies.
1 butterfly flies away.



Answer: -

$$4 - 1 =$$

